

Name: _____

Date: _____

Student Exploration: Collision Theory

Vocabulary: activated complex, catalyst, chemical reaction, concentration, enzyme, half-life, molecule, product, reactant, surface area

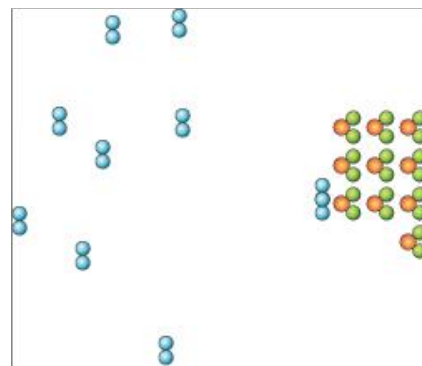
Prior Knowledge Questions (Do these BEFORE using the Gizmo.)

1. Suppose you added a spoonful of sugar to hot water and another to ice-cold water. Which type of water will cause the sugar to dissolve more quickly? _____
2. Suppose you held a lighted match to a solid hunk of wood and another match to a pile of wood shavings. Which form of wood will catch fire more easily? _____

Gizmo Warm-up

A **chemical reaction** causes the chemical compositions of substances to change. **Reactants** are substances that enter into a reaction, and **products** are substances produced by the reaction. The *Collision Theory* Gizmo™ allows you to experiment with several factors that affect the rate at which reactants are transformed into products in a chemical reaction.

You will need blue, green, and orange markers or colored pencils for the first part of this activity.

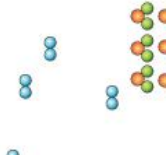


1. Look at the key at the bottom of the SIMULATION pane. In the space below, draw the two reactants and two products of this chemical reaction.

Reactants:

Products:

2. Click **Play** (▶). What do you see? _____

Activity A: Temperature	<u>Get the Gizmo ready:</u> <ul style="list-style-type: none"> • Click Reset (🔄). • Check that the Reactant concentration is set to 1.0 mol/L, the Catalyst concentration is set to 0.00 mol/L, and the Surface area is Minimum. 	
--	---	---

Question: How does temperature affect the rate of a chemical reaction?

1. Observe: Select the ANIMATION tab. View the animation with **No catalyst** selected.

What do you see? _____

When two reactant **molecules** meet, they form a temporary structure called an **activated complex**. The activated complex breaks up into the product molecules.

2. Observe: Return to the CONTROLS pane. Set the **Temperature** to 0 °C and the **Simulation speed** to its maximum setting. Click **Play**.

A. Describe the motions of the molecules. _____

B. Now set the **Temperature** to 200 °C. How does increasing the temperature affect the motions of the molecules? _____

C. What do you notice about the chemical reaction at the higher temperature? _____

3. Interpret: Select the GRAPH tab. Click the zoom out button (⊖) until you can see the whole graph. What does this graph show? _____

4. Predict: How do you think temperature will affect the rate of a chemical reaction? _____

(Activity A continued on next page)

Activity A (continued from previous page)

5. Gather data: Click **Reset**. A useful way to compare reaction rates is to record the time required for half of the reactants to react, called the **half-life** of the reaction. With the **Temperature** set to 200 °C, click **Play**. Click **Pause** (⏸) when the number of reactant molecules is 10. Record the half-life time in the first space of the table below.

Trial	200 °C	150 °C	100 °C	50 °C
1				
2				
Mean half-life				

Repeat the experiment at different temperatures to complete the table. (Note: To get exact times, you can refer to the TABLE tab.)

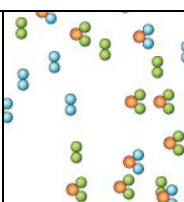
6. Calculate: Calculate the mean half-life for each temperature. Fill in these values above.

(Hint: To get an exact mean, first convert each time to seconds by multiplying the minutes value by 60 and adding this to the seconds. To find the mean in seconds, add up the two times and divide by two. Convert the answer back to minutes and seconds.)

7. Analyze: What do your results indicate? _____

8. Draw conclusions: For two molecules to react, they must collide at just the right angle and with enough energy to break the original bonds and form new ones. Based on these facts, why does the reaction tend to go more quickly at higher temperatures?

9. Apply: Paper must be heated to 234 °C to begin reacting with oxygen. This can be done by putting the paper over a flame. Why do you think the paper must be heated to start burning?

Activity B: Surface area and concentration	<u>Get the Gizmo ready:</u> <ul style="list-style-type: none"> • Click Reset. • Check that the Catalyst concentration is set to 0.00 mol/L and the Surface area is Minimum. • Set the Temperature to 200 °C. 	
---	--	---

Introduction: Reaction rates are also influenced by **surface area** and **concentration**. The surface area of a solid is a measure of how much of the solid is exposed to other substances. The concentration of a substance is a measure of how many molecules of that substance are present in a given volume.

Question: How do surface area and concentration affect reaction rates?

1. Observe: Change the **Surface area** from **Minimum** to **Maximum**. How does this change the amount of **Reactant B** molecules that are exposed to **Reactant A**?

2. Predict: How do you think increasing the surface area will affect the rate of the reaction?

3. Gather data: Set the **Reactant concentration** to 2.0 mol/L. Use the Gizmo to measure the half-life of the reaction for each surface area setting. (There will now be 20 reactant molecules left at the half-life.) Then, calculate the mean half-life for each setting.

Trial	Minimum surface area	Maximum surface area
1		
2		
Mean half-life		

4. Analyze: What do your results indicate? _____

5. Explain: Why does the reaction proceed more quickly when the surface area is increased?

(Activity B continued on next page)

Activity B (continued from previous page)

6. Observe: Click **Reset**. Move the **Reactant concentration** slider back and forth. What do you notice?

7. Predict: How will increasing the reactant concentration affect the rate of the reaction? Why?

8. Gather data: Make sure the **Temperature** is 200 °C and the **Surface area** is **Maximum**. Use the Gizmo to measure the half-life for each given reactant concentration. (Note that the number of reactant molecules changes with each concentration.) Calculate the means.

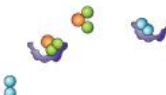
Trial	0.4 mol/L	0.8 mol/L	1.2 mol/L	1.6 mol/L	2.0 mol/L
1					
2					
Mean half-life					

9. Compare: If possible, find the mean times for each concentration for your entire class. What is the mean class time for a concentration of 0.4 mol/L? How about for 2.0 mol/L?

Mean for 0.4 mol/L: _____ Mean for 2.0 mol/L: _____

10. Analyze: What do these results indicate? _____

11. Apply: Hydrochloric acid reacts with the mineral calcite to produce carbon dioxide gas, water, and calcium chloride. Based on what you have learned in activity A and activity B, what are *three* things you could do to make the reaction occur more quickly?

Activity C: Catalysts	<u>Get the Gizmo ready:</u> <ul style="list-style-type: none"> Click Reset (🔄). 	
--	--	---

Introduction: A **catalyst** is a substance that helps a chemical reaction to proceed. The catalyst molecules are not changed by the reaction and can be reused over and over again.

Question: How do catalysts affect the rate of a chemical reaction?

1. Observe: Select the ANIMATION tab. Select **With catalyst**, and observe.

A. What do you see? _____

B. Why do you think the shape of a catalyst is important? _____

Many catalysts have a special shape that allows them to bind to specific reactant molecules.

2. Predict: How do you think catalysts will affect the rate of a chemical reaction? _____

3. Gather data: On the CONTROLS pane, set the **Reactant concentration** to 2.0 mol/L, the **Surface area** to **Maximum**, and the **Temperature** to 50 °C. Measure the half-life for each given catalyst concentration. Calculate the means.

Trial	Catalyst concentration			
	0.00 mol/L	0.05 mol/L	0.10 mol/L	0.15 mol/L
1				
2				
Mean half-life				

4. Analyze: What do your results indicate? _____

(Activity C continued on next page)

Activity C (continued from previous page)

5. **Explore:** Set the **Catalyst concentration** to 0.00 mol/L and the **Temperature** to 0 °C. Click **Play**, wait for 10 minutes of simulated time, and click **Pause**.

A. What happens? _____

B. Click **Reset**, set the **Catalyst concentration** to 0.25 mol/L, and click **Play**. After 10 simulated minutes, click **Pause**. What happens now? _____

C. Why do you think the catalysts allowed the chemical reaction to take place at 0 °C?

6. **Draw conclusions:** What is the usefulness of catalysts? _____

7. **Apply:** Most of the chemical reactions inside your body rely on protein catalysts called **enzymes** to take place. For example, the enzyme pepsin helps to break down protein molecules in your stomach. What might happen if your stomach stopped producing pepsin?